

Class - Prep  
Sub - Math

①

1. Learn to write numbers 1 to 10. (Write 5 times)

1 1

2 2

3 3

4 4

5 5

6 6

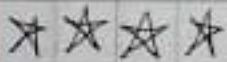
7 7

8 8


9 9

10 10


2. Count and write

a.  =


b.  =

c 

=

d 

=

e 

=

### 3. Draw and count

a . 7 -

\_\_\_\_\_

b . 1 -

\_\_\_\_\_

c . 5 -

\_\_\_\_\_

d . 8 -

\_\_\_\_\_

e . 3 -

\_\_\_\_\_

### 4 What comes after

a . 5 . \_\_\_\_\_

f . 1 . \_\_\_\_\_

b . 6 . \_\_\_\_\_

g . 8 . \_\_\_\_\_

c . 2 . \_\_\_\_\_

h . 3 . \_\_\_\_\_

d . 7 . \_\_\_\_\_

i . 9 . \_\_\_\_\_

e . 4 . \_\_\_\_\_

5. What comes between

a. 1 .      . 3

b. 2 .      . 4

c. 3 .      . 5

d. 4 .      . 6

e. 5 .      . 7

f. 6 .      . 8

g. 7 .      . 9

h. 8 .      . 10

6. Write the number names

1 - One

9 - Nine

2 - Two

10 - Ten

3 - Three

4 - Four

5 - Five

6 - Six

7 - Seven

8 - Eight

# Introduction of more $>$ , $<$ Less

(4)

